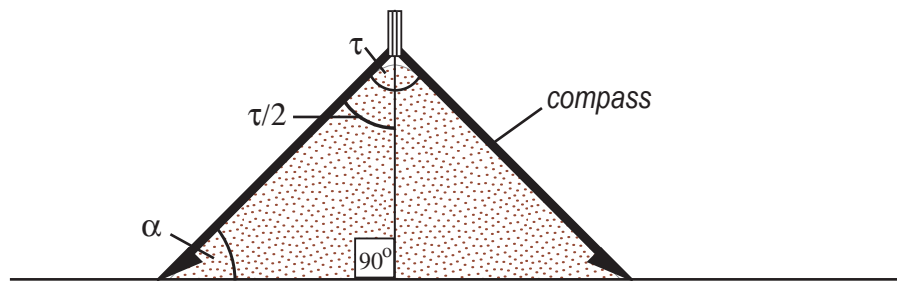
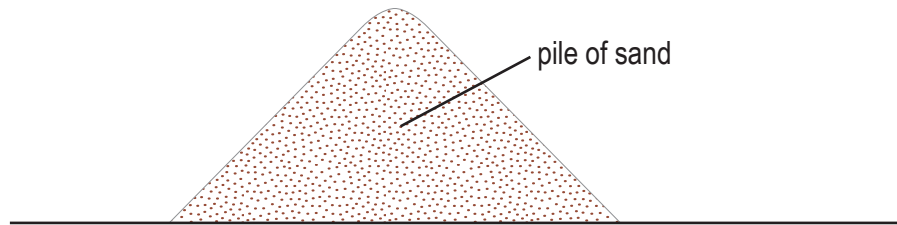

Geol 110 - In Class Activity #2
Determining the Angle of Repose for Sand

Name _____

Name _____

Name _____

Name _____



angle of repose = $\alpha = [90 - (\tau/2)] = [90 - \text{_____}] = \text{_____}^\circ$

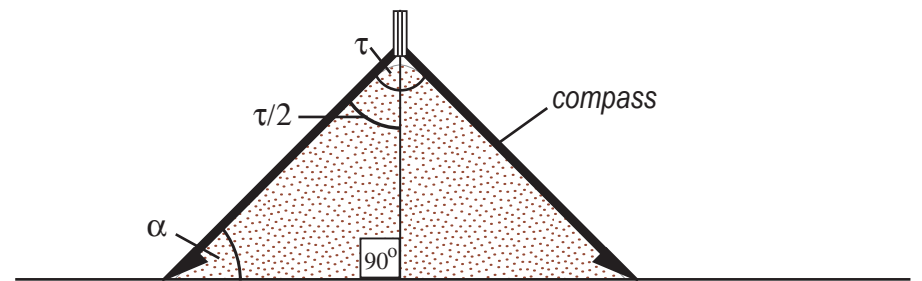
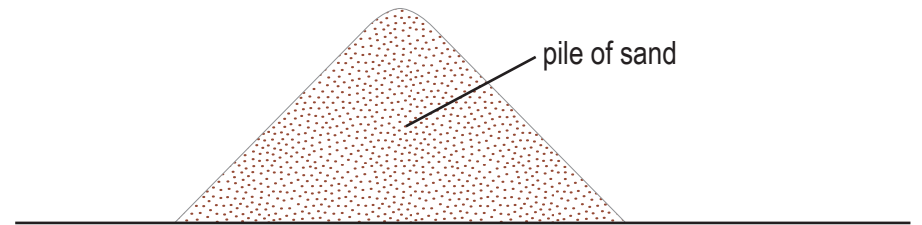
Geol 110 - In Class Activity #2
Determining the Angle of Repose for Sand

Name _____

Name _____

Name _____

Name _____



angle of repose = $\alpha = [90 - (\tau/2)] = [90 - \text{_____}] = \text{_____}^\circ$